



















Name: _____

Class: _____

MATERIALS

1. The boxes below list different groups of materials.

1	   Silver Copper Iron	2	   Paper Wood Water	3	   Petrol Paper Cotton
4	   Water Petrol Stone	5	   Aluminium Iron Cotton	6	   Wood Water Stone

Which box shows:

(a) Materials that are all metals?

Box number _____

(b) Materials that are all natural?

Box number _____

(c) Materials that all catch fire easily?

Box number _____

2. Match the use of each object below with its property. The first one has been done for you.

Object

Steel girders

Copper wiring

Aluminum saucepan

PVC drainpipes

Property of material

resistance to corrosion

thermal conductivity

electrical conductivity

strength

