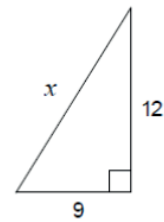


Name: _____

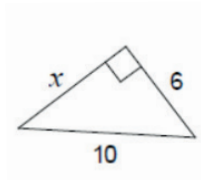
Class: _____

Pythagoras Theorem

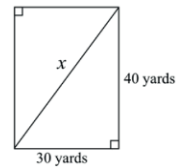
1 . Find the value of x .



2 . Find the value of x .



3. What is the length of the diagonal?



4 Use the Pythagorean Theorem to find out if these are right triangles.

Justify your answers.

